



Goldfish Holiday Shape Sort and graph!

Goldfish Holiday Fun!

Tally and Count

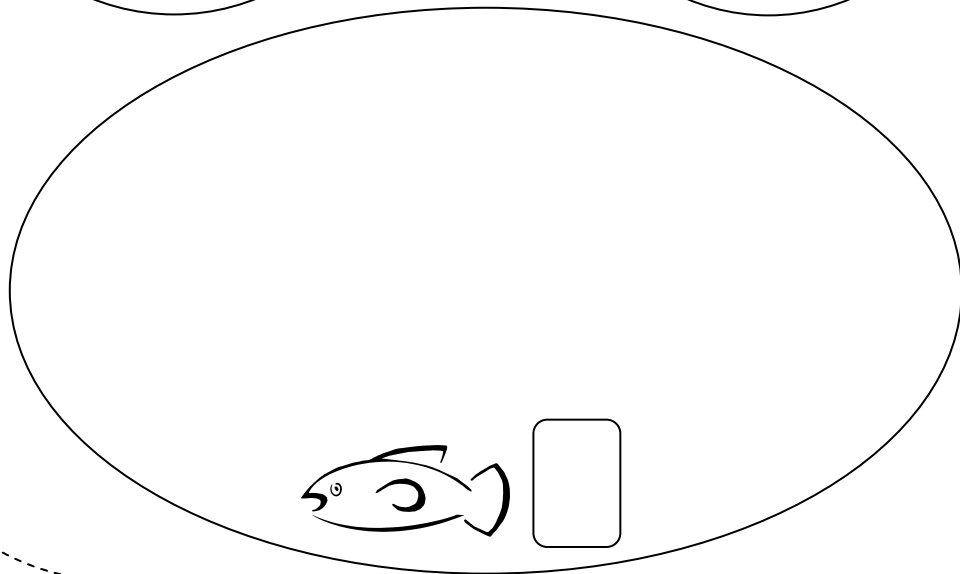
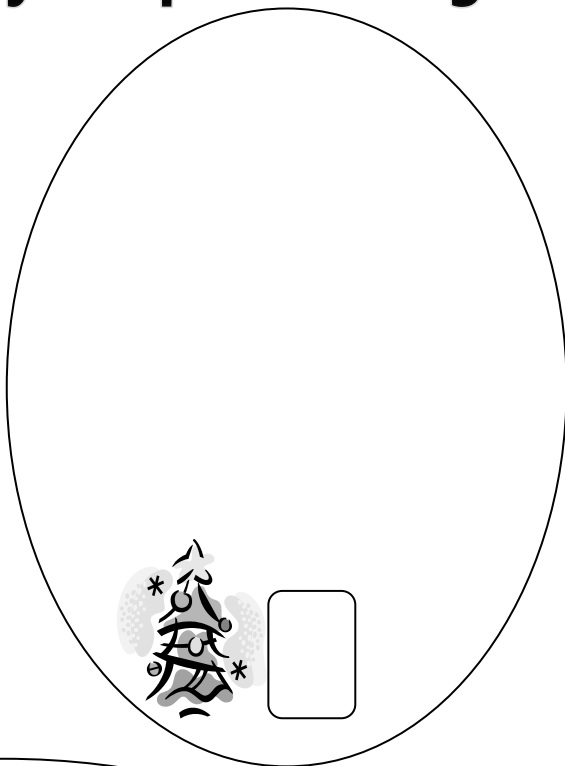
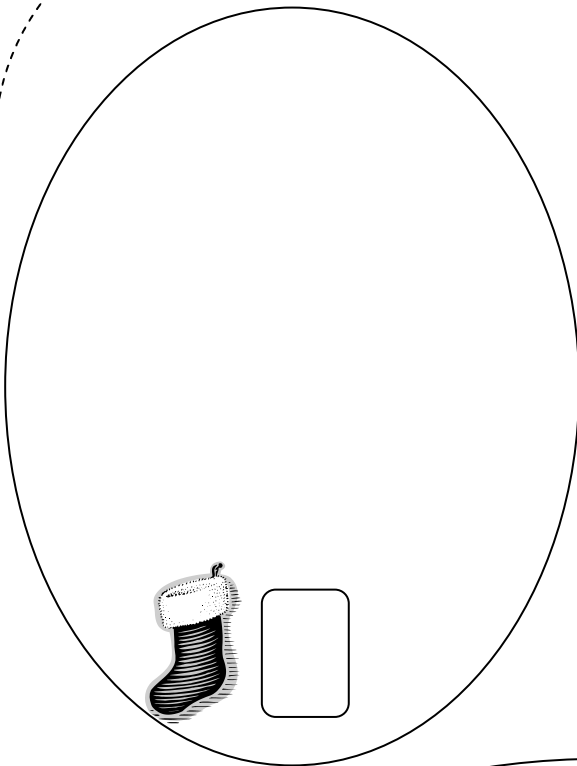
Graph list	
7	
6	
5	
4	
3	
2	
1	

Read it!

Sorting

Circle the number from the box.
Find the box of _____
Count all the items, standing and sit, make a total of _____ altogether.
Count one fish, I have _____ fish left.

Goldfish Holiday Shapes Sorting



Circle the answers:

I had the most:



I had the least of:



If I count all the trees, stockings, and fish, I have a total of _____ altogether.

If I eat one tree, I have _____ trees left.




If I eat one stocking, I have _____ stocking left.

Goldfish Holiday Fun!

Tally and Count!

		
---	---	---

Graph it!

7			
6			
5			
4			
3			
2			
1			
			

Read it!

How many trees do you have? _____

How many stockings do you have? _____

How many goldfish do you have? _____

Do you have more trees or more stockings?

Do you have more trees or more goldfish?

If you eat one stocking, how many will you have left? _____

If you add the stockings and the trees you have, how many do you have altogether?
