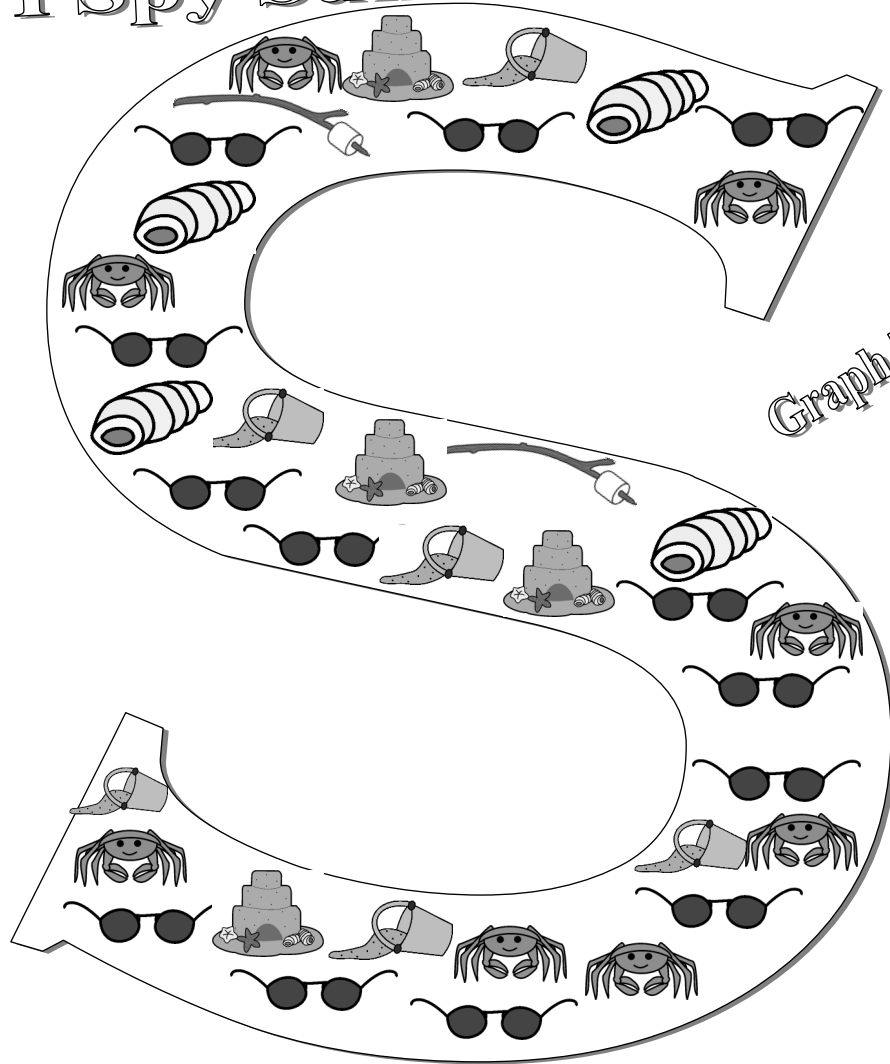














I Spy Summer!



Graph Them Up!

13						
12						
11						
10						
9						
8						
7						
6						
5						
4						
3						
2						
1						
						

I spy . I spy . I spy .

I spy . I spy . I spy .

I have the greatest number of _____.

I have the least amount of _____.

Read and Follow!














- 1.) Color each section of the umbrella a different color.
- 2.) Circle the boat on the bear shorts.
- 3.) Color the ball the bear is holding blue.
- 4.) Color the larger ball yellow and green.
- 5.) Draw a flag at the top of the sandcastle.
- 6.) Color the bear brown.
- 7.) How many shells do you see? Write the number of shells on the sand pail.

- 8.) In the box write a sentence about the picture.
- 9.) Draw a sun above the umbrella.
- 10.) Write your name above the bear's head.



Sunny Funny Money!

Directions: Write how much in each oval. Then solve the riddle below using the letters next to each amount.

 P <input type="text"/>	 E <input type="text"/>	 E <input type="text"/>	 B <input type="text"/>
 B <input type="text"/>	 L <input type="text"/>	 A <input type="text"/>	 E <input type="text"/>
 B <input type="text"/>	 H <input type="text"/>	 C <input type="text"/>	

Where do rocks spend their summer vacation?

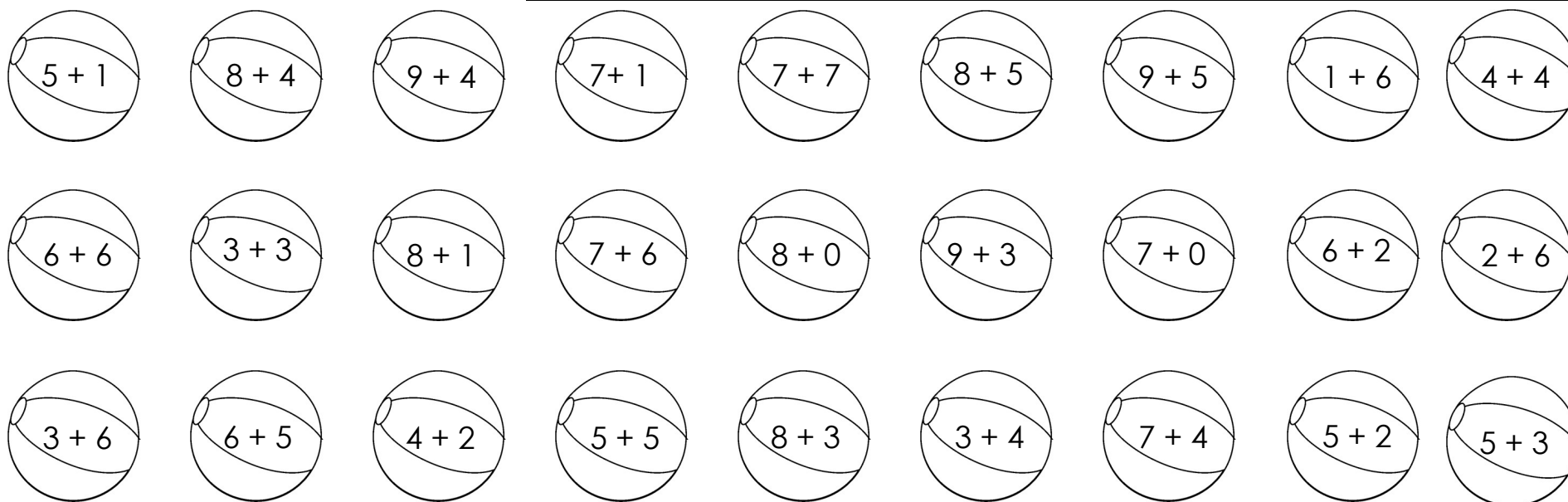
Draw It!

16 17 20 23 26 37 41 40 51 62 65

Beach Balls

Use the key to color the beach balls based on their sums.

BLUE: 6	YELLOW: 9	GREEN: 12
RED: 7	BROWN: 10	PINK: 13
BLACK: 8	WHITE: 11	Gray: 14



How many do you have of each color?

BLUE: _____	YELLOW: _____	GREEN: _____
RED: _____	BROWN: _____	PINK: _____
BLACK: _____	WHITE: _____	Gray: _____

1.) Which color do you have the most of? _____

2.) Which color do you have the least of? _____

3.) Do you have more brown balls or yellow balls? _____

4.) Add up the number of green and pink balls you have altogether and your sum is _____